


Aluno (a): _____

Componente Curricular: Matemática Turma: _____ Data: ____/____/____.


Professor (a): _____

1º) PINTE O BALÃO QUE INDICA A QUANTIDADE DE FIGURAS CORRESPONDENTES EM CADA QUADRADO.


6 3 9




2 7 5



1 8 6



2 4 9



2º) ESCREVA OS NÚMEROS POR EXTENSO:

2	
3	
5	
7	


Aluno (a): _____

Componente Curricular: Geografia Turma: _____ Data: ____/____/____.


Professor (a): _____

1º) MARQUE UM X NA SUA BRINCADEIRA FAVORITA:


PEGA-PEGA




CORDA



PASSA ANEL



ESCONDE-ESCONDE



2º) VOCÊ COSTUMA BRINCAR AO AR LIVRE? DE QUÊ?
